

Mathlete Training Centre
AMC 10A 2016

1. What is the value of $\frac{11! - 10!}{9!}$?

- (A) 99 (B) 100 (C) 110 (D) 121 (E) 132

MATHLETE TRAINING CENTRE
PERSEVERANCE RIGOR DEDICATION 224 BISHAN STREET 23 BI-131

MATHLETE TRAINING CENTRE
PERSEVERANCE RIGOR DEDICATION 224 BISHAN STREET 23 BI-131

2. For what value x does $10^x \cdot 100^{2x} = 1000^5$?

- (A) 1 (B) 2 (C) 3 (D) 4 (E) 5

MATHLETE TRAINING CENTRE
PERSEVERANCE RIGOR DEDICATION 224 BISHAN STREET 23 BI-131

3. For every dollar Ben spent on bagels, David spent 25 cents less. Ben paid \$12.50 more than David. How much did they spend in the bagel store together?

- (A) \$37.50 (B) \$50.00 (C) \$87.50 (D) \$90.00 (E) \$92.50

MATHLETE TRAINING CENTRE

PERSEVERANCE RIGOR DEDICATION 224 BISHAN STREET 23 BI-131

4. The remainder can be defined for all real numbers x and y with $y \neq 0$ by

$$\text{rem}(x, y) = x - y \left\lfloor \frac{x}{y} \right\rfloor$$

where $\left\lfloor \frac{x}{y} \right\rfloor$ denotes the greatest integer less than or equal to $\frac{x}{y}$. What is the value of $\text{rem}\left(\frac{3}{8}, -\frac{2}{5}\right)$?

- (A) $-\frac{3}{8}$ (B) $-\frac{1}{40}$ (C) 0 (D) $\frac{3}{8}$ (E) $\frac{31}{40}$

MATHLETE TRAINING CENTRE

PERSEVERANCE RIGOR DEDICATION 224 BISHAN STREET 23 BI-131

5. A rectangular box has integer side lengths in the ratio $1 : 3 : 4$. Which of the following could be the volume of the box?
- (A) 48 (B) 56 (C) 64 (D) 96 (E) 144

MATHLETE TRAINING CENTRE

PERSEVERANCE RIGOR DEDICATION 224 BISHAN STREET 23 BI-131

6. Ximena lists the whole numbers 1 through 30 once. Emilio copies Ximena's numbers, replacing each occurrence of the digit 2 by the digit 1. Ximena adds her numbers and Emilio adds his numbers. How much larger is Ximena's sum than Emilio's?
- (A) 13 (B) 26 (C) 102 (D) 103 (E) 110

MATHLETE TRAINING CENTRE

PERSEVERANCE RIGOR DEDICATION 224 BISHAN STREET 23 BI-131

7. The mean, median, and mode of the 7 data values 60, 100, x , 40, 50, 200, 90 are all equal to x . What is the value of x ?

- (A) 50 (B) 60 (C) 75 (D) 90 (E) 100

MATHLETE TRAINING CENTRE

PERSEVERANCE RIGOR DEDICATION 224 BISHAN STREET 23 BI-131

8. Trickster Rabbit agrees with Foolish Fox to double Fox's money every time Fox crosses the bridge by Rabbit's house, as long as Fox pays 40 coins in toll to Rabbit after each crossing. The payment is made after the doubling, Fox is excited about his good fortune until he discovers that all his money is gone after crossing the bridge three times. How many coins did Fox have at the beginning?

- (A) 20 (B) 30 (C) 35 (D) 40 (E) 45

MATHLETE TRAINING CENTRE

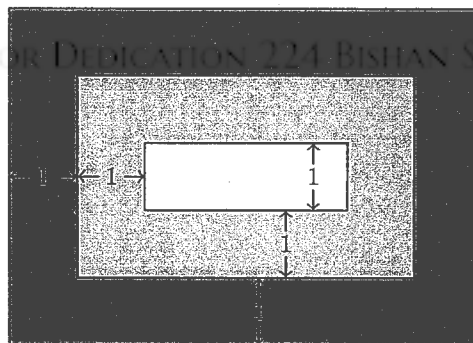
PERSEVERANCE RIGOR DEDICATION 224 BISHAN STREET 23 BI-131

9. A triangular array of 2016 coins has 1 coin in the first row, 2 coins in the second row, 3 coins in the third row, and so on up to N coins in the N th row. What is the sum of the digits of N ?
- (A) 6 (B) 7 (C) 8 (D) 9 (E) 10

MATHLETE TRAINING CENTRE

PERSEVERANCE RIGOR DEDICATION 224 BISHAN STREET 23 BI-131

10. A rug is made with three different colors as shown. The areas of the three differently colored regions form an arithmetic progression. The inner rectangle is one foot wide, and each of the two shaded regions is 1 foot wide on all four sides. What is the length in feet of the inner rectangle?

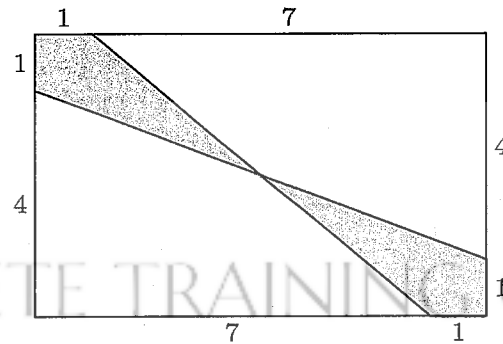


- (A) 1 (B) 2 (C) 4 (D) 6 (E) 8

MATHLETE TRAINING CENTRE

PERSEVERANCE RIGOR DEDICATION 224 BISHAN STREET 23 BI-131

11. Find the area of the shaded region.



- (A) $4\frac{3}{5}$ (B) 5 (C) $5\frac{1}{4}$ (D) $6\frac{1}{2}$ (E) 8

MATHLETE TRAINING CENTRE

PERSEVERANCE RIGOR DEDICATION 224 BISHAN STREET 23 BI-131

12. Three distinct integers are selected at random between 1 and 2016, inclusive. Which of the following is a correct statement about the probability p that the product of the three integers is odd?

- (A) $P < \frac{1}{8}$ (B) $P = \frac{1}{8}$ (C) $\frac{1}{8} < P < \frac{1}{3}$ (D) $P = \frac{1}{3}$ (E) $P > \frac{1}{3}$

MATHLETE TRAINING CENTRE

PERSEVERANCE RIGOR DEDICATION 224 BISHAN STREET 23 BI-131

13. Five friends sat in a movie theater in a row containing 5 seats, numbered 1 to 5 from left to right. (The directions "left" and "right" are from the point of view of the people as they sit in the seats.) During the movie Ada went to the lobby to get some popcorn. When she returned, she found that Bea had moved two seats to the right, Ceci had moved one seat to the left, and Dee and Edie had switched seats, leaving an end seat for Ada. In which seat had Ada been sitting before she got up?
- (A) 1 (B) 2 (C) 3 (D) 4 (E) 5

MATHLETE TRAINING CENTRE

PERSEVERANCE RIGOR DEDICATION 224 BISHAN STREET 23 BI-131

MATHLETE TRAINING CENTRE

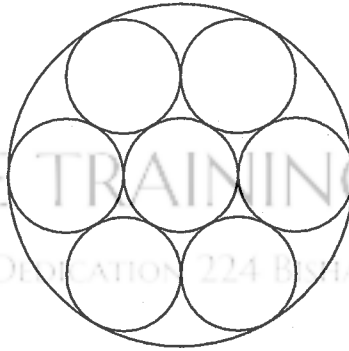
PERSEVERANCE RIGOR DEDICATION 224 BISHAN STREET 23 BI-131

14. How many ways are there to write 2016 as the sum of twos and threes, ignoring order? (For example, $1008 \cdot 2 + 0 \cdot 3$ and $402 \cdot 2 + 404 \cdot 3$ are two such ways.)
- (A) 236 (B) 336 (C) 337 (D) 403 (E) 672

MATHLETE TRAINING CENTRE

PERSEVERANCE RIGOR DEDICATION 224 BISHAN STREET 23 BI-131

15. Seven cookies of radius 1 inch are cut from a circle of cookie dough, as shown. Neighboring cookies are tangent, and all except the center cookie are tangent to the edge of the dough. The leftover scrap is reshaped to form another cookie of the same thickness. What is the radius in inches of the scrap cookie?



- (A) $\sqrt{2}$ (B) 1.5 (C) $\sqrt{\pi}$ (D) $\sqrt{2\pi}$ (E) π

MATHLETE TRAINING CENTRE

PERSEVERANCE RIGOR DEDICATION 224 BISHAN STREET 23 BI-131

16. A triangle with vertices $A(0, 2)$, $B(-3, 2)$, and $C(-3, 0)$ is reflected about the x -axis, then the image $\triangle A'B'C'$ is rotated counterclockwise about the origin by 90° to produce $\triangle A''B''C''$. Which of the following transformations will return $\triangle A''B''C''$ to $\triangle ABC$?
- (A) Counter-clockwise rotation about the origin by 90° .
 (B) Clockwise rotation about the origin by 90° .
 (C) Reflection about the x axis.
 (D) Reflection about the line $y = x$.
 (E) Reflection about the y axis.

17. Let N be a positive multiple of 5. One red ball and N green balls are arranged in a line in random order. Let $P(N)$ be the probability that at least $\frac{3}{5}$ of the green balls are on the same side of the red ball. Observe that $P(5) = 1$ and that $P(N)$ approaches $\frac{4}{5}$ as N grows large. What is the sum of the digits of the least value of N such that $P(N) < \frac{321}{400}$?
- (A) 12 (B) 14 (C) 16 (D) 18 (E) 20

MATHLETE TRAINING CENTRE

PERSEVERANCE RIGOR DEDICATION 224 BISHAN STREET 23 BI-131

MATHLETE TRAINING CENTRE

PERSEVERANCE RIGOR DEDICATION 224 BISHAN STREET 23 BI-131

18. Each vertex of a cube is to be labeled with an integer 1 through 8, with each integer being used once, in such a way that the sum of the four numbers on the vertices of a face is the same for each face. Arrangements that can be obtained from each other through rotations of the cube are considered to be the same. How many different arrangements are possible?
- (A) 1 (B) 3 (C) 6 (D) 12 (E) 24

MATHLETE TRAINING CENTRE

PERSEVERANCE RIGOR DEDICATION 224 BISHAN STREET 23 BI-131

19. In rectangle $ABCD$, $AB = 6$ and $BC = 3$. Point E between B and C , and point F between E and C are such that $BE = EF = FC$. Segments \overline{AE} and \overline{AF} intersect \overline{BD} at P and Q , respectively. The ratio $BP : PQ : QD$ can be written as $r : s : t$ where the greatest common factor of r, s and t is 1. What is $r + s + t$?
- (A) 7 (B) 9 (C) 12 (D) 15 (E) 20

MATHLETE TRAINING CENTRE

PERSEVERANCE RIGOR DEDICATION 224 BISHAN STREET 23 BI-131

MATHLETE TRAINING CENTRE

PERSEVERANCE RIGOR DEDICATION 224 BISHAN STREET 23 BI-131

20. For some particular value of N , when $(a + b + c + d + 1)^N$ is expanded and like terms are combined, the resulting expression contains exactly 1001 terms that include all four variables a, b, c , and d , each to some positive power. What is N ?
- (A) 9 (B) 14 (C) 16 (D) 17 (E) 19

MATHLETE TRAINING CENTRE

PERSEVERANCE RIGOR DEDICATION 224 BISHAN STREET 23 BI-131

21. Circles with centers P, Q and R , having radii 1, 2 and 3, respectively, lie on the same side of line l and are tangent to l at P', Q' and R' , respectively, with Q' between P' and R' . The circle with center Q is externally tangent to each of the other two circles. What is the area of triangle PQR ?

- (A) 0 (B) $\sqrt{\frac{2}{3}}$ (C) 1 (D) $\sqrt{6} - \sqrt{2}$ (E) $\sqrt{\frac{3}{2}}$

MATHLETE TRAINING CENTRE

PERSEVERANCE RIGOR DEDICATION 224 BISHAN STREET 23 BI-131

MATHLETE TRAINING CENTRE

PERSEVERANCE RIGOR DEDICATION 224 BISHAN STREET 23 BI-131

22. For some positive integer n , the number $110n^3$ has 110 positive integer divisors, including 1 and the number $110n^3$. How many positive integer divisors does the number $81n^4$ have?

- (A) 110 (B) 191 (C) 261 (D) 325 (E) 425

MATHLETE TRAINING CENTRE

PERSEVERANCE RIGOR DEDICATION 224 BISHAN STREET 23 BI-131

23. A binary operation \diamond has the properties that $a \diamond (b \diamond c) = (a \diamond b) \cdot c$ and that $a \diamond a = 1$ for all nonzero real numbers a, b , and c . (Here \cdot represents multiplication). The solution to the equation $2016 \diamond (6 \diamond x) = 100$ can be written as $\frac{p}{q}$, where p and q are relatively prime positive integers. What is $p + q$?
- (A) 109 (B) 201 (C) 301 (D) 3049 (E) 33601

MATHLETE TRAINING CENTRE

PERSEVERANCE RIGOR DEDICATION 224 BISHAN STREET 23 BI-131

MATHLETE TRAINING CENTRE

PERSEVERANCE RIGOR DEDICATION 224 BISHAN STREET 23 BI-131

24. A quadrilateral is inscribed in a circle of radius $200\sqrt{2}$. Three of the sides of this quadrilateral have length 200. What is the length of the fourth side?
- (A) 200 (B) $200\sqrt{2}$ (C) $200\sqrt{3}$ (D) $300\sqrt{2}$ (E) 500

MATHLETE TRAINING CENTRE

PERSEVERANCE RIGOR DEDICATION 224 BISHAN STREET 23 BI-131

25. How many ordered triples (x, y, z) of positive integers satisfy $\text{lcm}(x, y) = 72$, $\text{lcm}(x, z) = 600$ and $\text{lcm}(y, z) = 900$?
- (A) 15 (B) 16 (C) 24 (D) 27 (E) 64

MATHLETE TRAINING CENTRE

PERSEVERANCE RIGOR DEDICATION 224 BISHAN STREET 23 BI-131

MATHLETE TRAINING CENTRE

PERSEVERANCE RIGOR DEDICATION 224 BISHAN STREET 23 BI-131

MATHLETE TRAINING CENTRE

PERSEVERANCE RIGOR DEDICATION 224 BISHAN STREET 23 BI-131

MATHLETE TRAINING CENTRE

PERSEVERANCE RIGOR DEDICATION 224 BISHAN STREET 23 BI-131

MATHLETE TRAINING CENTRE

PERSEVERANCE RIGOR DEDICATION 224 BISHAN STREET 23 BI-131

MATHLETE TRAINING CENTRE

PERSEVERANCE RIGOR DEDICATION 224 BISHAN STREET 23 BI-131